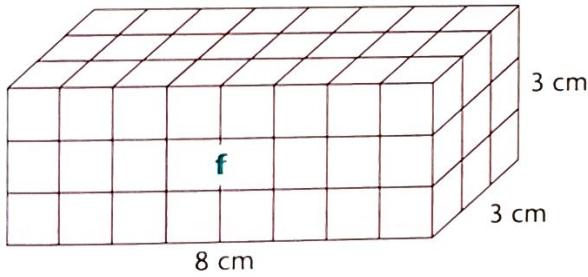
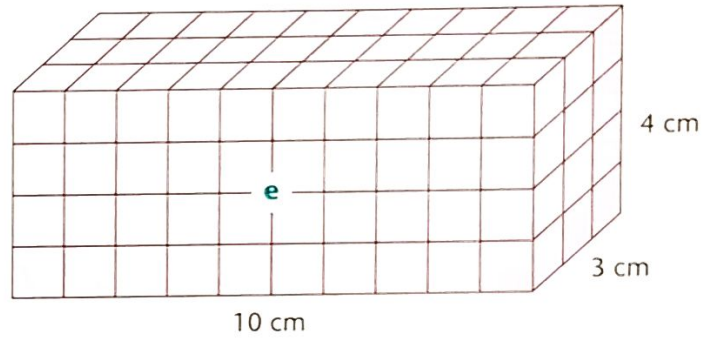
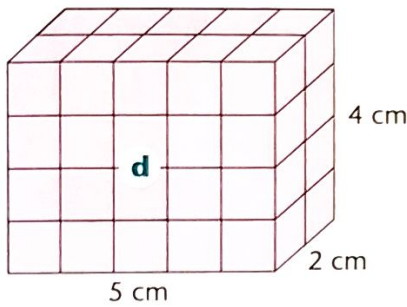
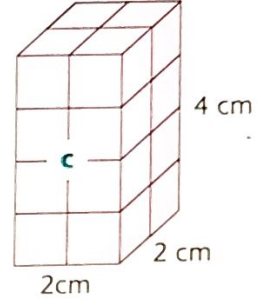
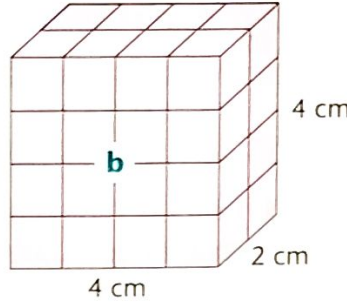
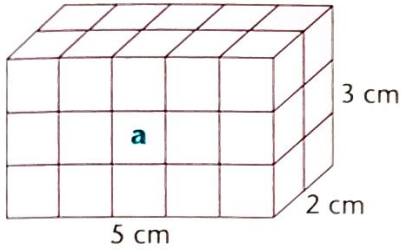
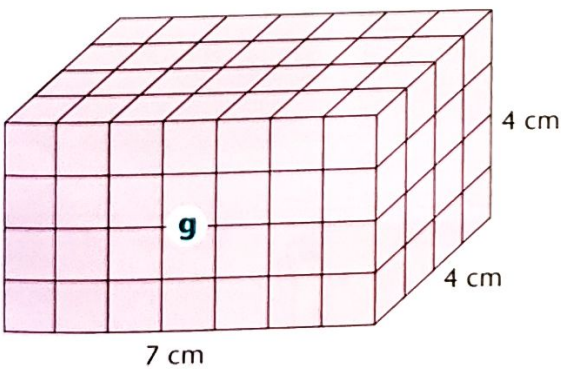


**11** Calculate the volume of each model made from centicubes. Record the data on the grid below.

**12** Order the volumes from the smallest to largest by numbering them from 1 to 7.



Shape	Area of base (Length × Width)	Number of layers (Height)	Total number of cubes in model	Order
a				
b				
c				
d				
e				
f				
g				



**13** Select the unit

**a** How many large Bozo Dolls can be packed neatly into the container?

\_\_\_\_\_

**b** How many small Bozo Dolls will fit into the container?

\_\_\_\_\_

